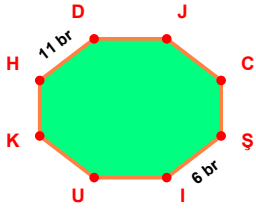
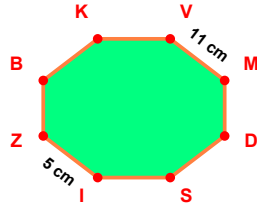


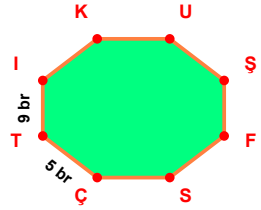
**SORU:** Aşağıdaki şekillerde verilen, kenar uzunlukları farklarını bulunuz.



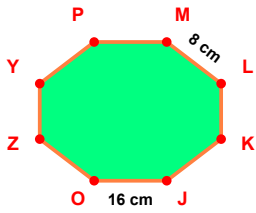
$$|HD| - |SI| = \dots\dots\dots$$



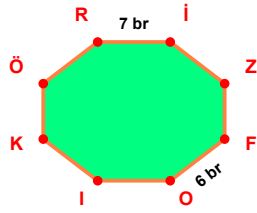
$$|VM| - |IZ| = \dots\dots\dots$$



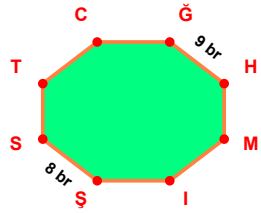
$$|TI| - |ÇT| = \dots\dots\dots$$



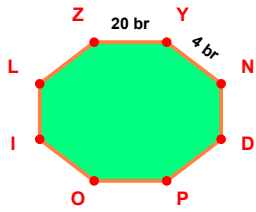
$$|JO| - |ML| = \dots\dots\dots$$



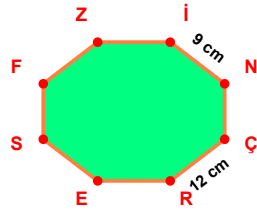
$$|Rİ| - |FO| = \dots\dots\dots$$



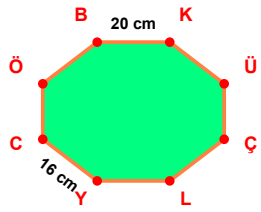
$$|ĞH| - |ŞS| = \dots\dots\dots$$



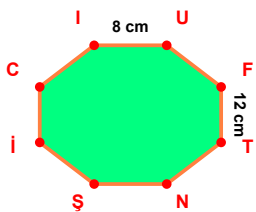
$$|ZY| - |YN| = \dots\dots\dots$$



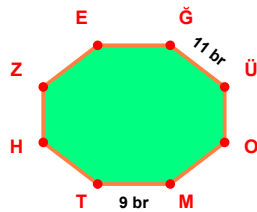
$$|ÇR| - |İN| = \dots\dots\dots$$



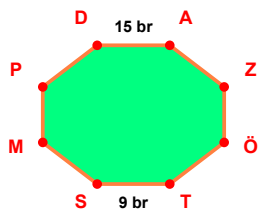
$$|BK| - |YC| = \dots\dots\dots$$



$$|FT| - |İU| = \dots\dots\dots$$

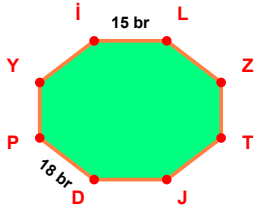


$$|ĞÜ| - |MT| = \dots\dots\dots$$

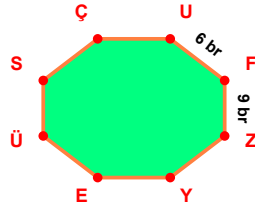


$$|DA| - |TS| = \dots\dots\dots$$

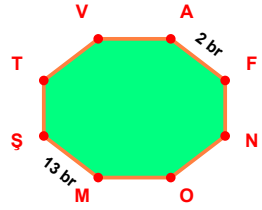
**SORU:** Aşağıdaki şekillerde verilen, kenar uzunlukları farklarını bulunuz.



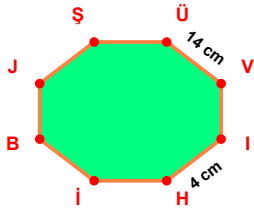
$$|DP| - |İL| = \dots\dots\dots$$



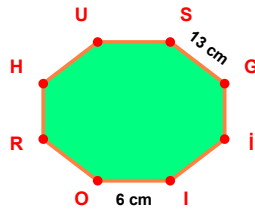
$$|FZ| - |UF| = \dots\dots\dots$$



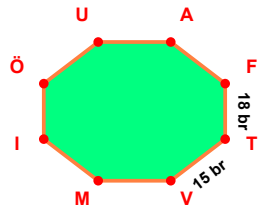
$$|MŞ| - |AF| = \dots\dots\dots$$



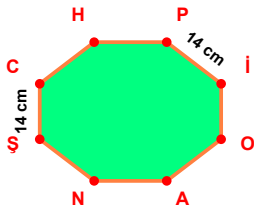
$$|ÜV| - |İH| = \dots\dots\dots$$



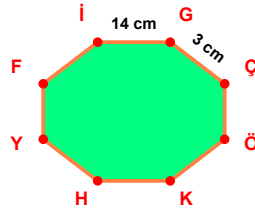
$$|SG| - |İO| = \dots\dots\dots$$



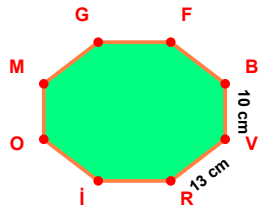
$$|FT| - |TV| = \dots\dots\dots$$



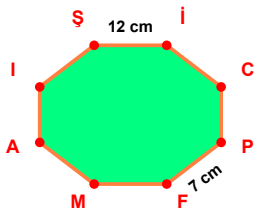
$$|PI| - |ŞC| = \dots\dots\dots$$



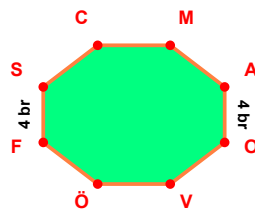
$$|İG| - |GÇ| = \dots\dots\dots$$



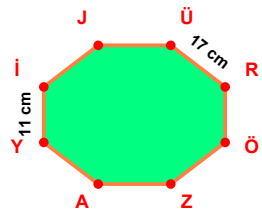
$$|VR| - |BV| = \dots\dots\dots$$



$$|Şİ| - |PF| = \dots\dots\dots$$



$$|AO| - |FS| = \dots\dots\dots$$



$$|ÜR| - |Yİ| = \dots\dots\dots$$

## SÜREÇ ODAKLI DEĞERLENDİRME ÖLÇEĞİ

Doğru Sayısı: ..... / 24

Öğretmen ilgili kutucuğu işaretler.

Geliştirilmeli (0-8)

İyi (9-14)

Çok İyi (15-20)

Mükemmel (21-24)



Hazırlayan: .....

Bu bölüme sınıfınızın ilgili kazanıma yönelik genel durumuna ilişkin gözlem ve izlenimlerinizi, öğrencilerinizin bu kazanımla ilgili öğrenme eksikliklerini ve bu eksikliklerin giderilmesi amacıyla yaptığınız/yapmayı planladığınız faaliyetleri not edebilirsiniz.

No	Adı - Soyadı	Toplam Puan	Değerlendirme
1			
2			
3			
4			
5			
6			
7			
8			
9			
10			
11			
12			
13			
14			
15			
16			
17			
18			
19			
20			
21			
22			
23			
24			
25			
26			
27			
28			
29			
30			
31			
32			
33			
34			
35			

Hazırlayan: .....